

Reasoning challenge



If I make a quarter turn clockwise I will be facing the same direction as if I make a three-quarter turn anticlockwise.

Is Tiny correct?
Explain your answer.

Reasoning challenge



If I make a quarter turn clockwise I will be facing the same direction as if I make a three-quarter turn anticlockwise.

Is Tiny correct?
Explain your answer.

Reasoning challenge



If I make a quarter turn clockwise I will be facing the same direction as if I make a three-quarter turn anticlockwise.

Is Tiny correct?
Explain your answer.

Reasoning challenge



If I make a quarter turn clockwise I will be facing the same direction as if I make a three-quarter turn anticlockwise.

Is Tiny correct?
Explain your answer.

Reasoning challenge



If I make a quarter turn clockwise I will be facing the same direction as if I make a three-quarter turn anticlockwise.

Is Tiny correct?
Explain your answer.

Reasoning challenge

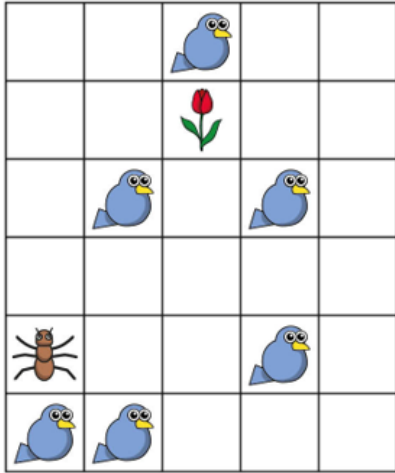


If I make a quarter turn clockwise I will be facing the same direction as if I make a three-quarter turn anticlockwise.

Is Tiny correct?
Explain your answer.

Fluency challenge


On this grid, the ant is not allowed to be on the same square as a bird.



How can the ant get to the flower?

Fluency challenge


On this grid, the ant is not allowed to be on the same square as a bird.



How can the ant get to the flower?

Fluency challenge


On this grid, the ant is not allowed to be on the same square as a bird.



How can the ant get to the flower?

Fluency challenge

On this grid, the ant is not allowed to be on the same square as a bird.



How can the ant get to the flower?